

Name: _____

Date: _____

INTERNET ACTIVITY

Oklahoma: Our History, Our Home

Chapter 12: Creating the 26th State


In this activity, you will learn about some of the towns that sprang up in Oklahoma near the time of statehood.

Instructions: Use the link below to complete the activity sheet.

Part I: Growth in the Territories

<https://www.loc.gov/collections/panoramic-maps/?fa=location:oklahoma>

- Click on the map of your choice, and then click the expanded view button in the top right.
- Using the “zoom in” and “zoom out” buttons, explore the map and see some of the details.



El Reno, Oklahoma Territory 1891. Source: Library of Congress, Geography and Map Division g4024e pm007143

1. What is the title of the map?

2. When was the map created?

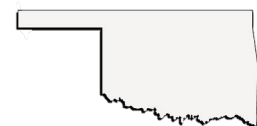
3. What purpose(s) did the map have? Who was the intended audience?

4. Identify the types of transportation on the map.

5. Identify any of the railroads that served the town.

6. What types of buildings can you locate (list four)?

7. Describe the area around the town.



Name: _____

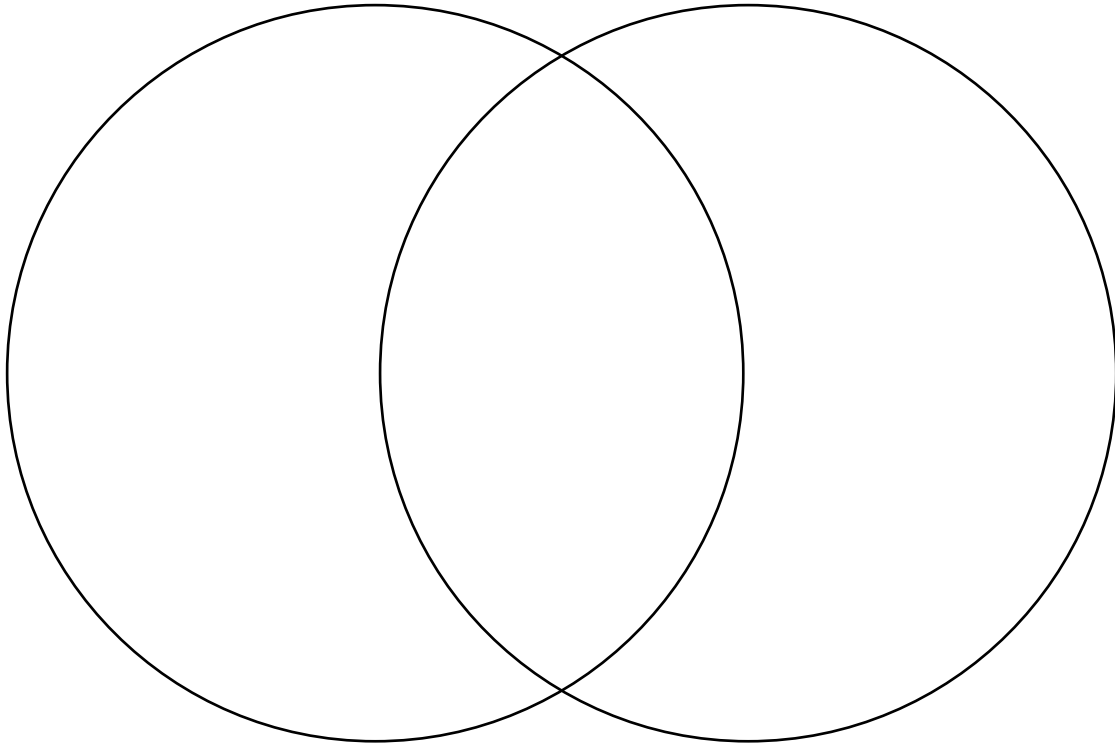
Date: _____

INTERNET ACTIVITY

Examine another map. Take a few minutes to compare it to your previous choice. Complete a Venn diagram to compare and contrast the two towns.

Town 1 _____

Town 2 _____



Based on information on the map, in which town would you choose to live? Why would you make that choice?

